

# EEE2035F: Signals and Systems I

## Class Test 2

22 April 2013

**Name:**

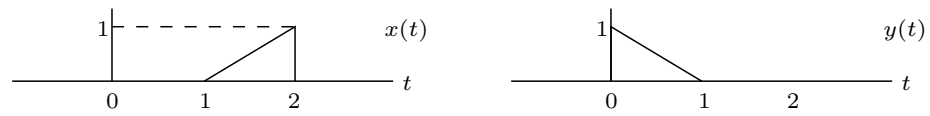
**Student number:**

---

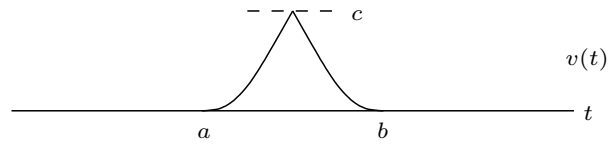
### Information

- The test is closed-book.
  - This test has *four* questions, totalling 20 marks.
  - Answer *all* the questions.
  - You have 45 minutes.
-

1. (5 marks) Consider the two signals below:

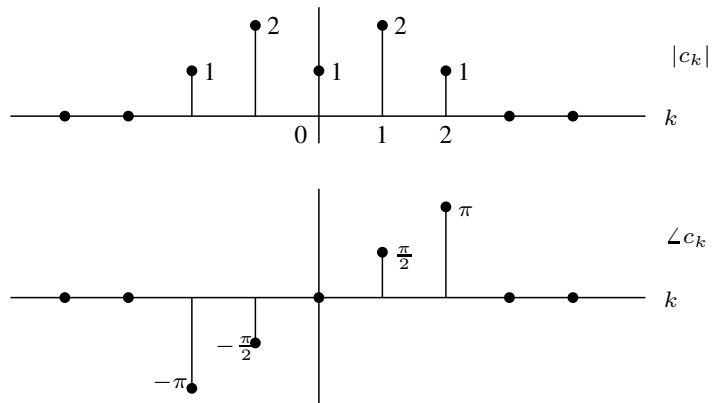


The convolution  $v(t) = x(t) * y(t)$  is as follows:



Specify  $a$ ,  $b$ , and  $c$ .

2. (5 marks) A signal  $x(t)$  with fundamental frequency  $\omega_0 = 2\pi$  radians/second has the Fourier series coefficients shown below:



- Is the signal real? Why?
- Write a time domain expression for the signal.
- What is the total power in the signal?

3. (5 marks) The signal

$$x(t) = 2 \cos(2t + \pi/3) + \sin(3t)$$

has a Fourier series representation of the form

$$x(t) = \sum_{k=-\infty}^{\infty} c_k e^{jk\omega_0 t}.$$

Specify  $\omega_0$ , and find and plot the magnitude and phase of the Fourier series coefficients as a function of the frequency  $\omega$ .

4. (5 marks) Use the definition of the Fourier transform (that is, without using tables or properties) to compute the frequency domain representations of the following signals:

(a)  $x_1(t) = \delta(t - c)$ .

(b)  $x_2(t) = e^{at}u(-t)$ , where  $a > 0$ .

# INFORMATION SHEET

## Fourier transform properties

Property	Transform Pair/Property
Linearity	$ax(t) + bv(t) \leftrightarrow aX(\omega) + bV(\omega)$
Time shift	$x(t - c) \leftrightarrow X(\omega)e^{-j\omega c}$
Time scaling	$x(at) \leftrightarrow \frac{1}{ a } X\left(\frac{\omega}{a}\right) \quad a > 0$
Time reversal	$x(-t) \leftrightarrow X(-\omega) = \overline{X(\omega)}$
Multiplication by power of $t$	$t^n x(t) \leftrightarrow j^n \frac{d^n}{d\omega^n} X(\omega) \quad n = 1, 2, \dots$
Frequency shift	$x(t)e^{j\omega_0 t} \leftrightarrow X(\omega - \omega_0) \quad \omega_0 \text{ real}$
Multiplication by $\cos(\omega_0 t)$	$x(t) \cos(\omega_0 t) \leftrightarrow \frac{1}{2} [X(\omega + \omega_0) + X(\omega - \omega_0)]$
Differentiation in time domain	$\frac{d^n}{dt^n} x(t) \leftrightarrow (j\omega)^n X(\omega) \quad n = 1, 2, \dots$
Integration	$\int_{-\infty}^t x(\lambda) d\lambda \leftrightarrow \frac{1}{j\omega} X(\omega) + \pi X(0)\delta(\omega)$
Convolution in time domain	$x(t) * v(t) \leftrightarrow X(\omega)V(\omega)$
Multiplication in time domain	$x(t)v(t) \leftrightarrow \frac{1}{2\pi} X(\omega) * V(\omega)$
Parseval's theorem	$\int_{-\infty}^{\infty} x(t)v(t) dt = \frac{1}{2\pi} \int_{-\infty}^{\infty} \overline{X(\omega)}V(\omega) d\omega$
Parseval's theorem (special case)	$\int_{-\infty}^{\infty} x^2(t) dt = \frac{1}{2\pi} \int_{-\infty}^{\infty}  X(\omega) ^2 d\omega$
Duality	$X(t) \leftrightarrow 2\pi x(-\omega)$

## Common Fourier Transform Pairs

$x(t) = \frac{1}{2\pi} \int_{-\infty}^{\infty} X(\omega)e^{j\omega t} d\omega$	$X(\omega) = \int_{-\infty}^{\infty} x(t)e^{-j\omega t} dt$
1 $(-\infty < t < \infty)$	$2\pi\delta(\omega)$
$-0.5 + u(t)$	$\frac{1}{j\omega}$
$u(t)$	$\pi\delta(\omega) + \frac{1}{j\omega}$
$\delta(t)$	1
$\delta(t - c)$	$e^{-j\omega c} \quad (c \text{ any real number})$
$e^{-bt}u(t)$	$\frac{1}{j\omega + b} \quad (b > 0)$
$e^{j\omega_0 t}$	$2\pi\delta(\omega - \omega_0) \quad (\omega_0 \text{ any real number})$
$p_\tau(t)$	$\tau \text{sinc} \frac{\tau\omega}{2\pi}$
$\tau \text{sinc} \frac{\tau t}{2\pi}$	$2\pi p_\tau(\omega)$
$\left(1 - \frac{2 t }{\tau}\right) p_\tau(t)$	$\frac{\tau}{2} \text{sinc}^2 \left(\frac{\tau\omega}{4\pi}\right)$
$\frac{\tau}{2} \text{sinc}^2 \frac{\tau t}{4\pi}$	$2\pi \left(1 - \frac{2 \omega }{\tau}\right) p_\tau(\omega)$
$\cos(\omega_0 t + \theta)$	$\pi [e^{-j\theta}\delta(\omega + \omega_0) + e^{j\theta}\delta(\omega - \omega_0)]$
$\sin(\omega_0 t + \theta)$	$j\pi [e^{-j\theta}\delta(\omega + \omega_0) - e^{j\theta}\delta(\omega - \omega_0)]$
$\sum_{n=-\infty}^{\infty} \delta(t - nT)$	$\frac{2\pi}{T} \sum_{k=-\infty}^{\infty} \delta(\omega - k\frac{2\pi}{T})$

## Trigonometric identities

$$\begin{aligned} \sin(-\theta) &= -\sin(\theta) & \cos(-\theta) &= \cos(\theta) & \tan(-\theta) &= -\tan(\theta) & \sin^2(\theta) + \cos^2(\theta) &= 1 \\ \sin(2\theta) &= 2\sin(\theta)\cos(\theta) & \cos(2\theta) &= \cos^2(\theta) - \sin^2(\theta) = 2\cos^2(\theta) - 1 = 1 - 2\sin^2(\theta) \\ \sin(\theta_1 + \theta_2) &= \sin(\theta_1)\cos(\theta_2) + \cos(\theta_1)\sin(\theta_2) & \cos(\theta_1 + \theta_2) &= \cos(\theta_1)\cos(\theta_2) - \sin(\theta_1)\sin(\theta_2) \\ e^{j\theta} &= \cos(\theta) + j\sin(\theta) \end{aligned}$$